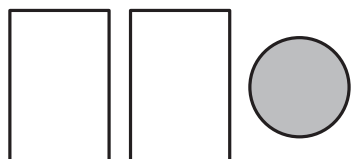


NAME _____

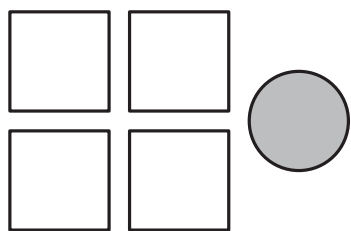
DATE _____

Add a Circle

Trace the numbers and complete the addition problems below. Use the pictures to help.



$$2 + 1 = \underline{\quad}$$




$$4 + 1 = \underline{\quad}$$



$$6 + 1 = \underline{\quad}$$



$$3 + 1 = \underline{\quad}$$



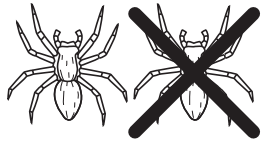
$$5 + 1 = \underline{\quad}$$

NAME _____

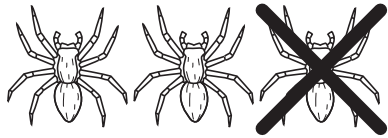
DATE _____

Subtract a Spider

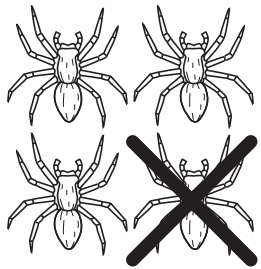
Trace the numbers and complete the subtraction problems below. Use the pictures to help.



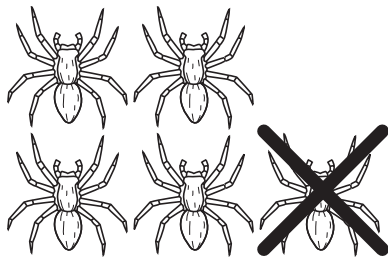
$$2 - 1 = \underline{\quad}$$



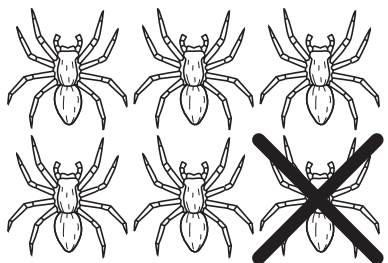
$$3 - 1 = \underline{\quad}$$



$$4 - 1 = \underline{\quad}$$



$$5 - 1 = \underline{\quad}$$

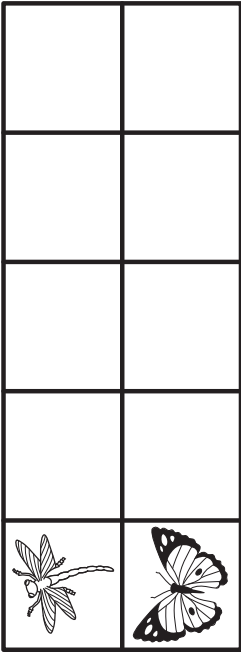







$$6 - 1 = \underline{\quad}$$

NAME _____ DATE _____

How Many Insects? Add Them Up

Solve the addition problems. Use the pictures to help.


$\begin{array}{r} 1 \\ + 1 \\ \hline \end{array}$		$\begin{array}{r} 2 \\ + 2 \\ \hline \end{array}$	
$\begin{array}{r} 3 \\ + 3 \\ \hline \end{array}$		$\begin{array}{r} 4 \\ + 4 \\ \hline \end{array}$	
$\begin{array}{r} 4 \\ + 4 \\ \hline \end{array}$		$\begin{array}{r} 5 \\ + 5 \\ \hline \end{array}$	

NAME _____

DATE _____

A Story Problem

3 seal pups are on the rock.
4 mother seals are in the water.
How many seals altogether?



Use pictures and numbers to show how you solve the problem.

NAME _____

DATE _____

Cats & Dogs Addition


Fill in the numbers and then solve the addition problem. Use the pictures to help.

1




$$\underline{\quad\quad} \text{ Cats} + \underline{\quad\quad} \text{ Dogs} = \underline{\quad\quad}$$

2



$$\underline{\quad\quad} \text{ Cats} + \underline{\quad\quad} \text{ Dog} = \underline{\quad\quad}$$

3



$$\underline{\quad\quad} \text{ Cats} + \underline{\quad\quad} \text{ Dogs} = \underline{\quad\quad}$$


NAME _____

DATE _____

Frog Addition


1 Color the frogs. Trace the numbers or symbols. Write an addition sentence to match the picture.

Color 2 frogs green. Color 3 frogs brown.




2 + 3 = _____

Color 4 frogs red. Color 1 frog blue.



_____ + _____ = _____

Color 3 frogs yellow. Color 2 frogs black.



_____ + _____ = _____

2 Add.

$$\begin{array}{r} 1 \\ + 2 \\ \hline \end{array}$$

$$\begin{array}{r} 3 \\ + 1 \\ \hline \end{array}$$

$$\begin{array}{r} 4 \\ + 1 \\ \hline \end{array}$$

$$\begin{array}{r} 2 \\ + 2 \\ \hline \end{array}$$

$$\begin{array}{r} 3 \\ + 2 \\ \hline \end{array}$$

$$\begin{array}{r} 4 \\ + 2 \\ \hline \end{array}$$

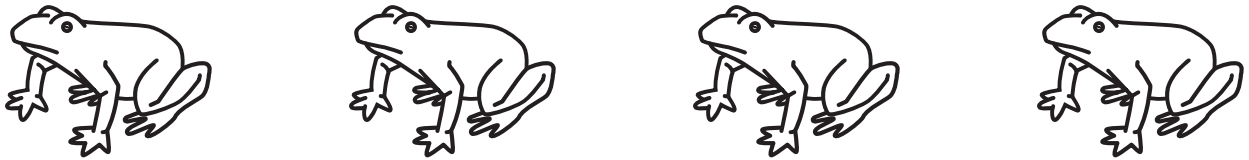
NAME _____

DATE _____

Frog Subtraction


1 Color the frogs. Trace the numbers or symbols. Write a subtraction sentence to match the picture.

Color 4 frogs green. Cross out 2 of them.



4 ... 2 ...

Color 5 frogs red. Cross out 1 of them.



5 ... 1 ...

Color 6 frogs brown. Cross out 3 of them.



....

....

2 Subtract.

$$\begin{array}{r} 2 \\ -1 \\ \hline \end{array}$$

$$\begin{array}{r} 3 \\ -2 \\ \hline \end{array}$$

$$\begin{array}{r} 4 \\ -2 \\ \hline \end{array}$$

$$\begin{array}{r} 5 \\ -3 \\ \hline \end{array}$$

$$\begin{array}{r} 5 \\ -4 \\ \hline \end{array}$$

$$\begin{array}{r} 6 \\ -1 \\ \hline \end{array}$$

$$\begin{array}{r} 6 \\ -2 \\ \hline \end{array}$$